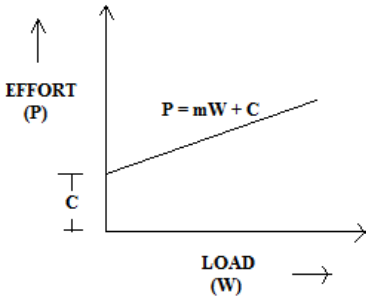




Important Instructions to examiners:

- 1) The answers should be examined by key words and not as word-to-word as given in the model answer scheme.
- 2) The model answer and the answer written by candidate may vary but the examiner may try to assess the understanding level of the candidate.
- 3) The language errors such as grammatical, spelling errors should not be given more importance. (Not applicable for subject English and Communication Skills.)
- 4) While assessing figures, examiner may give credit for principal components indicated in the figure. The figures drawn by the candidate and those in the model answer may vary. The examiner may give credit for any equivalent figure drawn.
- 5) Credits may be given step wise for numerical problems. In some cases, the assumed constant values may vary and there may be some difference in the candidate's answers and the model answer.
- 6) In case of some questions credit may be given by judgment on part of examiner of relevant answer based on candidate's understanding.
- 7) For programming language papers, credit may be given to any other program based on equivalent concept.

| Que. No. | Sub. Que. | Model Answers | Marks | Total Marks |
|------------|-------------|--|----------|-------------|
| Q.1 | | Answer any TEN of the following : | | 20 |
| | a) | Explain the term law of machine. | | |
| | Ans. | The relation between the load lifted (W) and the effort applied (P) is known as the law of machine. This relationship, when plotted on a graph results in a straight line as shown below. The equation of this straight line is – $P = (mW + c)N$  | 1 | |
| | | Where, m = slope of line = constant c = Intercept on y axis = effort required to start the machine | 1 | 2 |
| | b) | How will you find whether machine is reversible or not? | | |
| | Ans. | By calculating the efficiency of machine, we can decide whether the machine is reversible or not. If % η < 50% machine is non-reversible i.e. self-locking machine. If % η > 50% machine is reversible. | 2 | 2 |



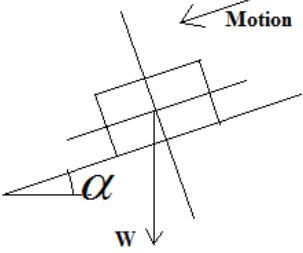
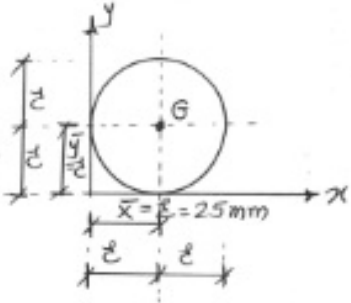
| Que. No. | Sub. Que. | Model Answers | Marks | Total Marks |
|----------|------------|--|--------|-------------|
| Q.1 | c) Ans. | <p>State VR of Simple axle & wheel.</p> <p>VR of Simple axle & Wheel = D/d</p> <p>Whether, D = Diameter of Effort Wheel</p> <p>d = Diameter of load drum</p> | 2 | 2 |
| | d) Ans. | <p>Differentiate between statics & dynamics.</p> <p><u>Statics</u> is the branch of applied mechanics which deals with forces & their action on bodies at rest.</p> <p><u>Dynamics</u> is the branch of applied mechanics which deals with forces & their action on bodies in motion.</p> | 1 1 | 2 |
| | e) Ans. | <p>What is Unit Newton force?</p> <p>Unit Newton force is that force which when acts on a body of mass 1 Kg produces an acceleration of 1 m/sec^2 in it.</p> <div style="text-align: center;"> </div> | 2 | 2 |
| | f) Ans. | <p>State parallelogram law of forces. Derive the equations for magnitude & direction of resultant force.</p> <p>Parallelogram of forces states, "If two forces acting at & away from point be represented in magnitude & direction by the two adjacent sides of parallelogram, then the diagonal of the parallelogram passing through the point of intersection of the two forces, represents the resultant in magnitude & direction.</p> <div style="text-align: center;"> </div> <p>Let's consider two concurrent forces P & Q acting at & away from O as shown in Fig.. Let these two forces be represented in magnitude & direction by two adjacent sides OA & OB of the parallelogram $OACB$. Thus the line joining O & C represents the resultant R in magnitude & direction, according to law.</p> <p>Draw CD perpendicular to meet OA produced.</p> <p>Draw AC parallel to OB & $OB = AC = Q$</p> | 1 | |



| Que. No. | Sub. Que. | Model Answers | Marks | Total Marks |
|----------|-----------|---|-------------------|-------------|
| Q.1 | | <p>OA = P & OC = R AD = Q cos Θ & CD = Q sin Θ In right angled triangle ODC, $OC^2 = OD^2 + DC^2 = (OA + AD)^2 + DC^2$ $= (P+Q \cos \Theta)^2 + (Q \sin \Theta)^2$ $= P^2 + Q^2 \cos^2 \Theta + 2 PQ \cos \Theta + Q^2 \sin^2 \Theta$ $= P^2 + Q^2 (\cos^2 \Theta + \sin^2 \Theta) + 2 PQ \cos \Theta$ $R^2 = P^2 + Q^2 + 2 PQ \cos \Theta$----- ($\cos^2 \Theta + \sin^2 \Theta = 1$)</p> $R = \sqrt{P^2 + Q^2 + 2PQ \cos \theta}$ <p>----- Magnitude of R</p> <p>Let, Θ = Angle between the two forces P & Q. If P, Q & Θ are known, the magnitude of R can be found out. Let R make an angle α with the direction of P. In right angle triangle ODC, $\tan \alpha = \frac{CD}{OD} = \frac{CD}{OA+AD} = \frac{Q \sin \theta}{P+Q \cos \theta}$ $\alpha = \tan^{-1} \left(\frac{Q \sin \theta}{P+Q \cos \theta} \right)$ ----- Direction of R</p> | 1/2 | 2 |
| | g) Ans. | <p>State Varignon's theorem. Varignon's theorem states, " The algebraic sum of moments of all forces about any point is equal to moment of resultant about the same point". Let, $\sum MF_A$ = Algebraic sum of moments of all forces about point A MR_A = Moment of Resultant about point A Then, $\sum MF_A = MR_A$</p> | 1 | |
| | h) Ans. | <p>What are the limitations of Lami's theorem? 1) This theorem is applicable only for three forces. 2) This theorem is applicable when forces are concurrent. 3) This theorem is applicable only when body is in equilibrium. 4) This theorem is not applicable for non-concurrent force system.</p> | 1M each (any two) | 2 |



| Que. No. | Sub. Que. | Model Answers | Marks | Total Marks | | | | | | | | | | |
|---|--|---|--------------------|-------------|-----------|-------------|---|--|------------------------|------------------------|------------------------------------|-------------------------------|---|--|
| Q.1 | i) | Differentiate between resultant & equilibrant. | 1M each (any two) | 2 | | | | | | | | | | |
| | Ans. | <table border="1"> <thead> <tr> <th>Resultant</th> <th>Equilibrant</th> </tr> </thead> <tbody> <tr> <td>1) Resultant is a single force which can produce the same effect on the body as it is produced by all forces acting together.</td> <td>1) Equilibrant is a single force which when acts with other forces brings the set of forces & body in equilibrium.</td> </tr> <tr> <td>2) It is donated by R.</td> <td>2) It is denoted by E.</td> </tr> <tr> <td>3) It causes displacement of body.</td> <td>3) It keeps the body at rest.</td> </tr> <tr> <td>4) The set of forces which causes the displacement of a body are called as components of a resultant or component forces.</td> <td>4) The set of forces which keeps the body at rest are called as components of a equilibrant or equilibrant forces.</td> </tr> </tbody> </table> | | | Resultant | Equilibrant | 1) Resultant is a single force which can produce the same effect on the body as it is produced by all forces acting together. | 1) Equilibrant is a single force which when acts with other forces brings the set of forces & body in equilibrium. | 2) It is donated by R. | 2) It is denoted by E. | 3) It causes displacement of body. | 3) It keeps the body at rest. | 4) The set of forces which causes the displacement of a body are called as components of a resultant or component forces. | 4) The set of forces which keeps the body at rest are called as components of a equilibrant or equilibrant forces. |
| | Resultant | Equilibrant | | | | | | | | | | | | |
| 1) Resultant is a single force which can produce the same effect on the body as it is produced by all forces acting together. | 1) Equilibrant is a single force which when acts with other forces brings the set of forces & body in equilibrium. | | | | | | | | | | | | | |
| 2) It is donated by R. | 2) It is denoted by E. | | | | | | | | | | | | | |
| 3) It causes displacement of body. | 3) It keeps the body at rest. | | | | | | | | | | | | | |
| 4) The set of forces which causes the displacement of a body are called as components of a resultant or component forces. | 4) The set of forces which keeps the body at rest are called as components of a equilibrant or equilibrant forces. | | | | | | | | | | | | | |
| | | <p>5)</p> <p>Where, P & Q = Forces R = Resultant E = Equilibrant</p> | | | | | | | | | | | | |
| | j) | What are the two advantages of friction? | 1 M each (any two) | 2 | | | | | | | | | | |
| | Ans. | <ol style="list-style-type: none"> 1) One can walk easily on rough surface than smooth surface. 2) Moving vehicle on road can be stopped suddenly by applying brakes. 3) One can hammer nail into wall. 4) One can easily hold pen, pencil & can write on paper. | | | | | | | | | | | | |
| | k) | Define angle of repose. | 1 | | | | | | | | | | | |
| | Ans. | Angle of repose is defined as the angle made by the inclined plane with the horizontal plane at which the body placed on an inclined plane is just on the point of moving down the plane, under the action of its own weight. | | | | | | | | | | | | |

| Que. No. | Sub. Que. | Model Answers | Marks | Total Marks |
|----------|------------|--|-------|-------------|
| Q.1 | |  | 1 | 2 |
| | l) Ans. | <p>What is relation between coefficient of friction & angle of repose?</p> <p>Relation between coefficient of friction & angle of repose is given by $\mu = \tan \alpha$</p> <p>Where, μ = Coefficient of friction & α = Angle of repose.</p> | 2 | 2 |
| | m) Ans. | <p>Calculate & show the centroid of circle of 50 mm diameter.</p>  <p style="text-align: center;">$\bar{x} = \bar{y} = 25\text{mm}$</p> | 1 | 2 |
| | n) Ans. | <p>Differentiate between centroid & centre of gravity.</p> <p>Centroid :- It is defined as the point through which the entire area of a plane figure is assumed to act, for all positions of the lamina. e. g. Triangle, Square</p> <p>Centre of Gravity :- It is defined as the point through which the whole weight of the body is assumed to act, irrespective of the position of a body. e.g. Cone, Cylinder.</p> | 1 | 2 |



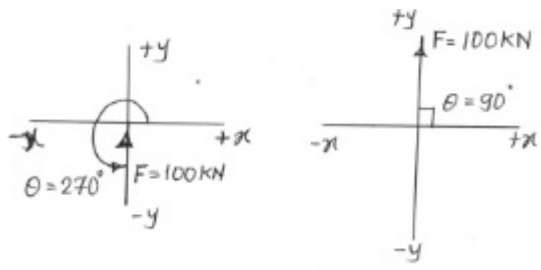
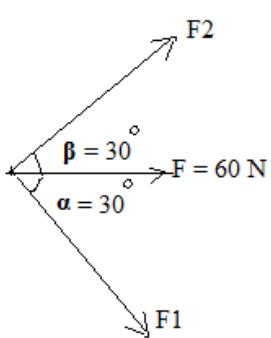
| Que. No. | Sub. Que. | Model Answers | Marks | Total Marks |
|----------|-----------|--|-------|-------------|
| Q.2 | | Answer any FOUR of the following : | | 16 |
| | a) | The velocity ratio of a certain machine is 50. Determine the effort required to lift a load of 1500 N if the efficiency of the machine is 40%. | | |
| | Ans. | $\% \eta = \frac{MA}{VR} \times 100$ $40 = \frac{MA}{50} \times 100$ $MA = 20$ <p>But, $MA = \frac{W}{P}$</p> $20 = \frac{1500}{P}$ $P = 75N$ | 2 | 4 |
| | b) | Certain machine has a law of machine $P = 0.025 W + 20$ N, with $VR = 60$. Calculate its efficiency at a load of 1 KN. | | |
| | Ans. | 1) Using Law of machine $P = (0.025 W + 20) N.$ $= ((0.025 \times 1000) + 20) N$ ----- Putting $W = 1000 N$ $= 45 N$ | 2 | 4 |
| | | 2) $MA = \frac{W}{P} = \frac{1000}{45} = 22.222$ $\% \eta = \frac{MA}{VR} \times 100 = \frac{22.222}{60} \times 100$ $\% \eta = 37.036\%$ | 2 | |
| | c) | In a lifting machine, a load of 10 KN is raised by effort of 300 N. If the efficiency is 75%. Calculate MA & VR, if the machine lifts a load by effort of 550 N. Find the law of machine. | | |
| | Ans. | $MA = \frac{W}{P} = \frac{10000}{300} = 33.33$ $\% \eta = \frac{MA}{VR} \times 100$ $VR = 44.44$ | 1 | |

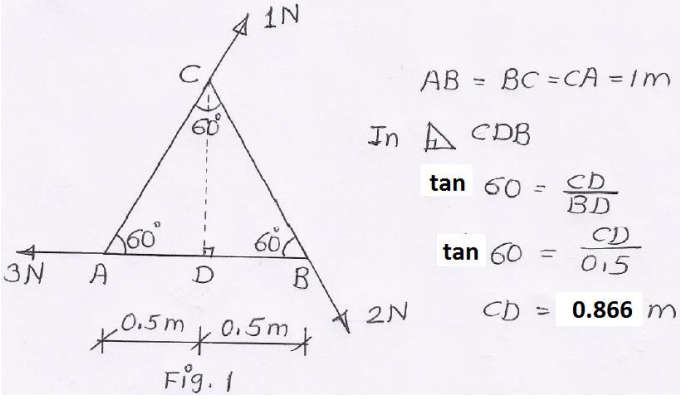
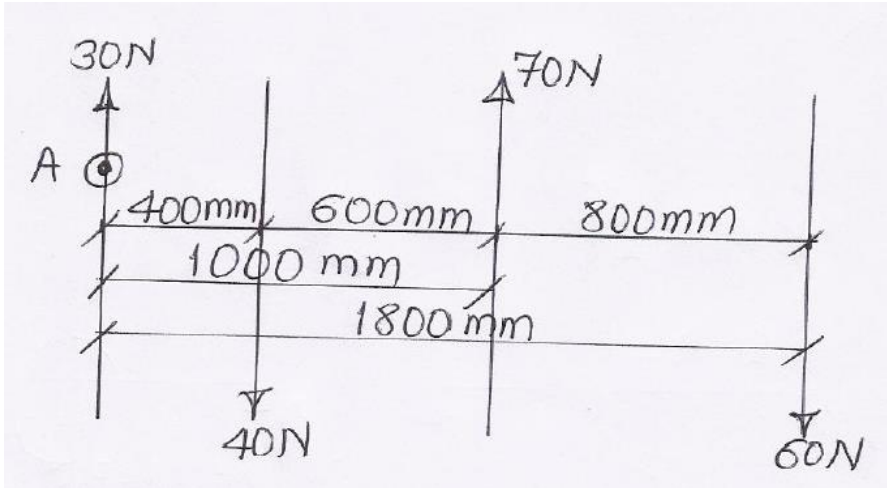


| Que. No. | Sub. Que. | Model Answers | Marks | Total Marks |
|----------|-----------|---|---------------------|-------------|
| Q.2 | | Law of machine is – $P = mW + C$ $300 = m(10000) + c$ ----- (1) $550 = m(20000) + c$ ----- (2) Subtracting equation (1) from (2) $m = 0.025$ Putting value of m in equation (1), $300 = (0.025 \times 10000) + C$ $C = 50 \text{ N}$ Hence, law of machine is, $P = (0.025)W + 50 \text{ N}$ | 1 1 1 | 4 |
| | d) | In a differential axle & wheel, the dia. of wheel is 400 mm & that of axle is 100 mm & 80 mm, if an effort of 50 N can lift a load of 1500 N, find VR & efficiency of the machine. | | |
| | Ans. | (1) VR of differential axle & wheel is given by - $VR = \frac{2D}{d_1 - d_2} = \frac{2 \times 400}{100 - 80}$ $VR = 40$ | 2 | 4 |
| | | $M.A. = \frac{1500}{50} = 30$ $\% \eta = \frac{M.A.}{V.R.} \times 100 = \frac{30}{40} \times 100$ $\% \eta = 75\%$ | 2 | |
| | e) | A screw jack has effort wheel dia of 200 mm & pitch is 5 mm. Find VR, if load of 1000 N is lifted by an effort of 250 N. Find the efficiency of a machine. | | |
| | Ans. | 1) VR of simple screw jack is given by – $VR = \frac{\pi D}{p}$ $VR = \frac{\pi \times 200}{5}$ $VR = 125.66$ | 2 | |

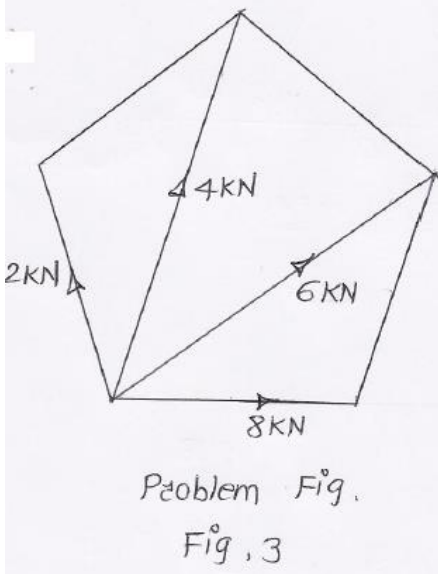
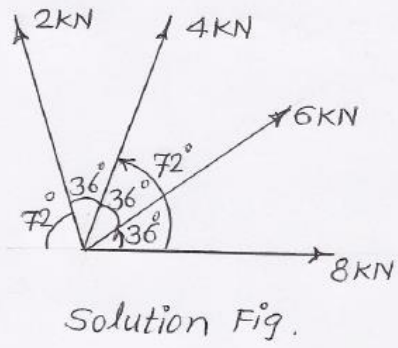


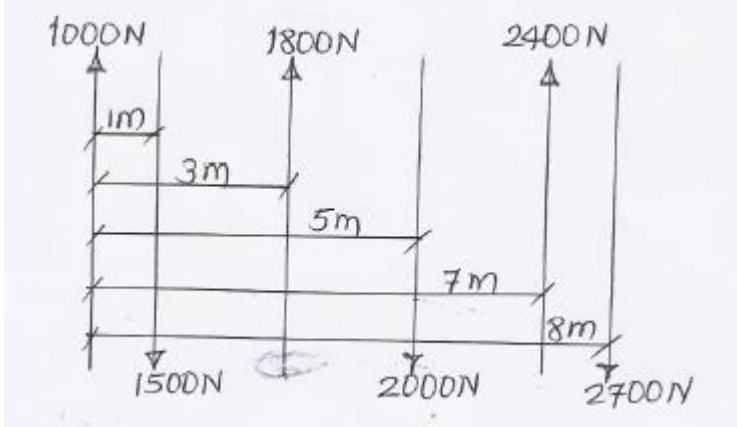

| Que. No. | Sub. Que. | Model Answers | Marks | Total Marks |
|----------|-----------|--|-------|-------------|
| Q.2 | | 2) $MA = \frac{W}{P} = \frac{1000}{250} = 4$ | 1 | 4 |
| | | 3) $\% \eta = \frac{M.A.}{V.R.} \times 100 = \frac{4.0}{125.66} \times 100$ $\% \eta = 3.183\%$ | 1 | |
| | f) | In a Weston's pulley block, the radius of the smaller wheel is $\frac{3}{4}$ than that of a larger wheel. What load is lifted by the pulley block with an effort of 100 N at an efficiency of 50 %. | | |
| | Ans. | Let, r = Radius of smaller wheel R = Radius of larger wheel d = Diameter of smaller wheel D = Diameter of bigger wheel $r = \frac{3}{4}R$ $\frac{d}{2} = \frac{3}{4} \times \frac{D}{2}$ $d = \frac{3}{4}D$ $VR = \frac{2D}{D-d} = \frac{2D}{D-\frac{3}{4}D} = \frac{2}{1-\frac{3}{4}} = 8$ $\% \eta = \frac{MA}{VR} \times 100$ $50 = \frac{MA}{8} \times 100$ $MA = 4$ <i>But, $MA = \frac{W}{P}$</i> $4 = \frac{W}{100}$ $W = 400N$ | 2 | 4 |
| | | | 2 | |

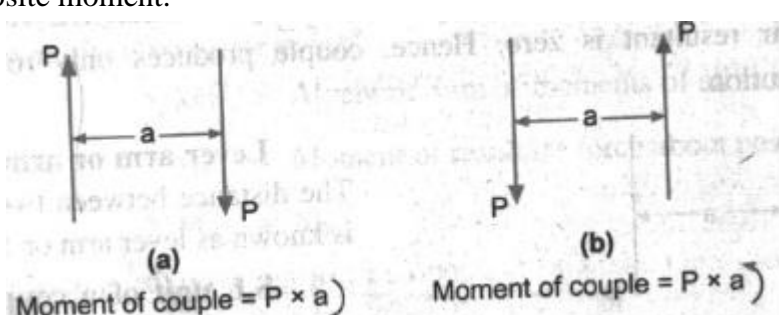
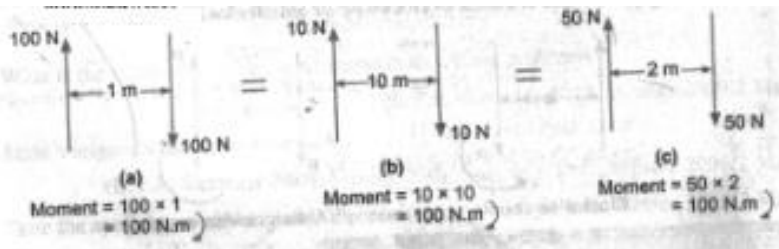
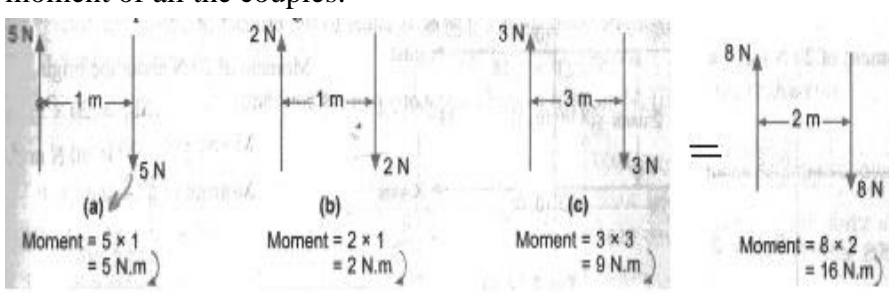
| Que. No. | Sub. Que. | Model Answers | Marks | Total Marks |
|------------|-----------|--|--------|-------------|
| Q.3 | | <p>Answer any FOUR of the following :</p> | | 16 |
| | a) | <p>Find the components of the force 100 KN (push) acting at 270° with x axis.</p> | | |
| | Ans. |  <p> $F_x = F \cos \theta = 100 \times \cos 90$ $F_x = 0N$ $F_y = F \sin \theta = 100 \times \sin 90$ $F_y = 100N$ </p> | 2 2 | 4 |
| | b) | <p>What are the components of 60 N force acting horizontal in two directions on either side, at an angle of 30° each?</p> | | |
| | Ans. |  <p> $F_1 = \frac{F \sin \alpha}{\sin(\alpha + \beta)} = \frac{60 \sin 30}{\sin(30 + 30)} = 34.64N$ $F_2 = \frac{F \sin \beta}{\sin(\alpha + \beta)} = \frac{60 \sin 30}{\sin(30 + 30)} = 34.64N$ </p> | 2 2 | 4 |
| | c) | <p>Find the algebraic sum of moment of all forces shown in Fig. 1 about the point C.</p> | | |

| Que. No. | Sub. Que. | Model Answers | Marks | Total Marks |
|----------|-----------|--|-------|-------------|
| Q.3 | Ans. |  <p style="text-align: right;"> $AB = BC = CA = 1m$ In $\triangle CDB$ $\tan 60 = \frac{CD}{BD}$ $\tan 60 = \frac{CD}{0.5}$ $CD = 0.866 m$ </p> | 2 | 4 |
| | | $M_c = (1 \times 0) + (2 \times 0) + (3 \times 0.866)$ $M_c = 2.598 \text{ Nm (Clockwise)}$ | 2 | |
| | d) | <p>Four forces of 30 N (upward), 40 N (downward), 70 N (upward) & 60 N (downward) are acting in a series. Distances between the forces are 400 mm, 600 mm, 800 mm respectively. Find the moment of a couple.</p> | | |
| | Ans. |  | 2 | 4 |
| | | <p>Taking moment of all forces about 30 N force i.e. about point A</p> $M = (30 \times 0) + (40 \times 400) - (70 \times 1000) + (60 \times 1800)$ $M = 54000 \text{ Nm (Clockwise)}$ | 2 | |

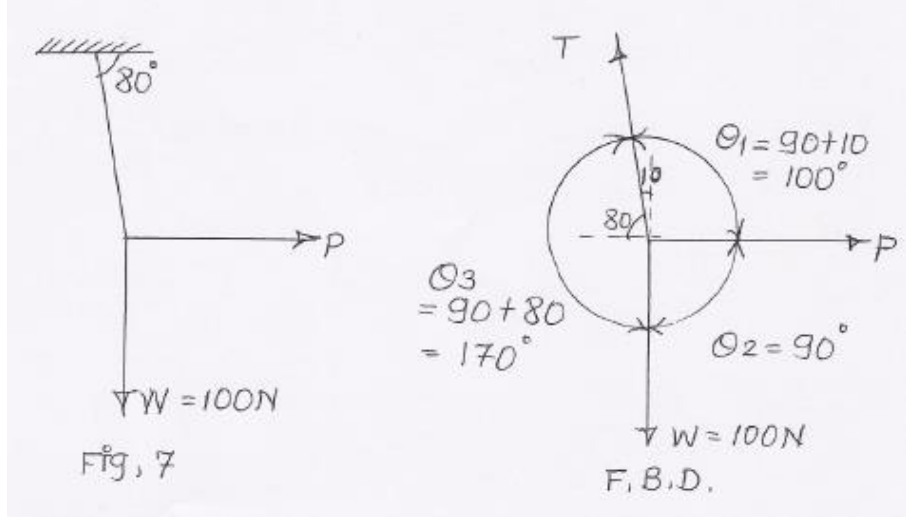
| Que. No. | Sub. Que. | Model Answers | Marks | Total Marks |
|----------|-----------|--|-------|-------------|
| Q.3 | e) | <p>Find the angle between two equal forces P, if the resultant is also equal to P.</p> <p>Ans. Using Law of parallelogram of forces</p> $R^2 = P^2 + Q^2 + 2PQ \cos \theta$ $P^2 = P^2 + P^2 + 2PP \cos \theta$ $P^2 = P^2 + P^2 + 2P^2 \cos \theta$ $P^2 = P^2(1+1+2 \cos \theta)$ $1 = 2(1 + \cos \theta)$ $\frac{1}{2} = (1 + \cos \theta)$ $0.5 - 1 = \cos \theta$ $\cos^{-1}(-0.5) = \theta$ $\theta = 120^\circ$ | 2 | 4 |
| | f) | <p>Find the resultant of all the forces as shown in Fig. 2. Mark its position & direction on a sketch.</p> <p>Ans.</p> <p>1) Resolving all forces</p> $\sum F_x = -150 - 800 \cos 50 + 500 \cos 40 = -281.21N$ $\sum F_y = 800 \sin 50 + 500 \sin 40 - 600 = +334.23N$ <p>2) Magnitude of Resultant</p> $R = \sqrt{(\sum F_x)^2 + (\sum F_y)^2} = \sqrt{(-281.21)^2 + (334.23)^2}$ $R = 436.79N$ | 2 | |
| | | | 1 | |
| | | | 1 | |

| Que. No. | Sub. Que. | Model Answers | Marks | Total Marks |
|----------|-----------|--|-------|-------------|
| Q.3 | | <p>3) Since $\sum F_x$ is -ve & $\sum F_y$ is +ve, R lies in Second quadrant</p> <p>4) Position of Resultant</p> $\theta = \tan^{-1} \left \frac{\sum F_y}{\sum F_x} \right = \tan^{-1} \left \frac{334.23}{281.21} \right $ $\theta = 49.92^\circ$ | 1 | 4 |
| | | | 1 | |
| Q.4 | | <p>Answer any FOUR of the following :</p> <p>a) Find the resultant & magnitude & direction of the forces acting on a regular pentagon shown in Fig. 3</p> | | 16 |
| | |  | | |
| | |  | | |
| | | <p>Ans.</p> <p>1) Resolving all forces</p> $\sum F_x = 8 + 6 \cos 36 + 4 \cos 72 - 2 \cos 72 = +13.47 \text{ kN}$ $\sum F_y = 6 \sin 36 + 4 \sin 72 + 2 \sin 72 = +9.23 \text{ kN}$ <p>2) Magnitude of Resultant</p> $R = \sqrt{(\sum F_x)^2 + (\sum F_y)^2} = \sqrt{(13.47)^2 + (9.23)^2}$ $R = 16.33 \text{ kN}$ <p>3) Since $\sum F_x$ is +ve & $\sum F_y$ is +ve, R lies in First quadrant</p> <p>4) Position of Resultant</p> $\theta = \tan^{-1} \left \frac{\sum F_y}{\sum F_x} \right = \tan^{-1} \left \frac{9.23}{13.47} \right $ $\theta = 34.42^\circ$ | 1 | |
| | | | 1 | 4 |
| | | | 1 | |
| | | | 1 | |

| Que. No. | Sub. Que. | Model Answers | Marks | Total Marks |
|----------|-----------|--|-------|-------------|
| Q.4 | b) | <p>Six parallel forces of magnitude 1000 N, 1500 N, 1800 N, 2000 N, 2400 N, 2700 N are acting at 1, 3, 5, 7, 8 m from the first force. Forces 1st, 3rd, & 5th are acting upwards while other acting vertically downwards. Find the resultant force analytically.</p> <p>Ans.</p>  <p>1) Magnitude of Resultant $R = +1000 - 1500 + 1800 - 2000 + 2400 - 2700 = -1000 \text{ N}$ $= 1000 \text{ N } (\downarrow)$ -ve sign indicates Resultant acts vertically downwards.</p> <p>2) Position of Resultant Considering Varignon's theorem of moment & taking moment of all forces @ about 1000 N force. Let, R acts at x distance from 1000 N force.</p> $\Sigma M_F = M_R$ $(1000 \times 0) + (1500 \times 1) - (1800 \times 3) + (2000 \times 5) - (2400 \times 7) + (2700 \times 8) = R \times x$ $10900 = 1000 \times x$ $x = 10.9 \text{ m}$ <p>Hence, R must be located at 10.9 m distance from 1000 N force, so as to produce clockwise moment.</p> | 2 | 4 |
| | c) | <p>Write any four properties of a couple.</p> <p>Ans.</p> <p>1) The resultant of the forces of a couple is zero. 2) The moment of a couple is equal to the product of one of the force & arm of couple. 3) Moment of a couple about any point is constant.</p>  <p>Moment of a couple = $P \times a$ Moment of a couple about 'C' $= P \times AC - P \times BC$ $= P(AB + BC) - P \times BC$ $= P(AB) + P(BC) - P(BC)$ $= P(AB) = P \times a$</p> <p>Moment of a couple about 'D' $= -P \times AD + P \times BD = -P \times AD + P \times (AD + AB)$ $= -P(AD) + P(AD) + P(AB)$ $= P(AB) = P \times a$</p> | 2 | |

| Que. No. | Sub. Que. | Model Answers | Marks | Total Marks |
|----------|-----------|--|---------------------|-------------|
| Q.4 | | <p>4) A couple can be balanced only by another couple of equal & opposite moment.</p>  <p>5) Two or more couples are said to be equal when they have same sense & moment.</p>  <p>6) Any number of coplanar couples can be represented by a single couple, the moment of which is equal to the algebraic sum of the moment of all the couples.</p>  | 1 M each (any four) | 4 |

| Que. No. | Sub. Que. | Model Answers | Marks | Total Marks |
|----------|-----------|--|-------|-------------|
| Q.4 | d) | <p>Find graphically the resultant of a concurrent force system. See Fig. 4</p> <p>From vector dia, $l(ae) = 5.3 \text{ cm}$ $R = l(ae) \times \text{SCALE}$ $= 5.3 \times 100$ $R = 530 \text{ N}$ $\theta = 54^\circ$ - from Space Dia.</p> <p>SCALE = 1 cm = 100 N</p> | 2 | 4 |

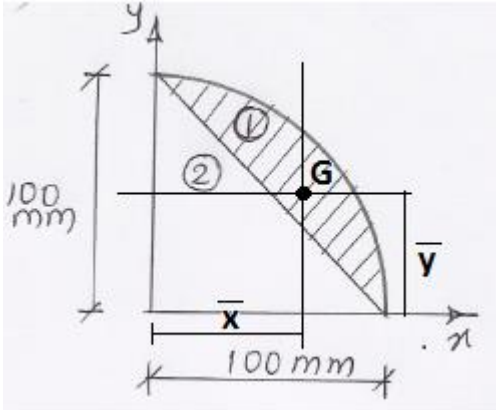
| Que. No. | Sub. Que. | Model Answers | Marks | Total Marks |
|----------|-----------|--|-------------------|--------------------|
| Q.5 | | <p>Answer any FOUR of the following :</p> <p>a) A horizontal force P as shown in Fig. 7 keeps the weight of 100 N in equilibrium. Find the magnitude P & tension in the string T.</p> <p>Ans.</p>  <p>Using Lami's theorem,</p> $\frac{W}{\sin 100^\circ} = \frac{T}{\sin 90^\circ} = \frac{P}{\sin 170^\circ}$ $\frac{100}{\sin 100^\circ} = \frac{T}{\sin 90^\circ} = \frac{P}{\sin 170^\circ}$ <p>Using term (1) and (2)</p> $\frac{100}{\sin 100^\circ} = \frac{T}{\sin 90^\circ}$ $T = 100 \times \frac{\sin 90^\circ}{\sin 100^\circ}$ <p>T = 101.54 N</p> <p>Using term (1) and (3)</p> $\frac{100}{\sin 90^\circ} = \frac{P}{\sin 170^\circ}$ $P = 100 \times \frac{\sin 170^\circ}{\sin 100^\circ}$ <p>P = 17.63 N</p> | <p>2</p> <p>2</p> | <p>16</p> <p>4</p> |

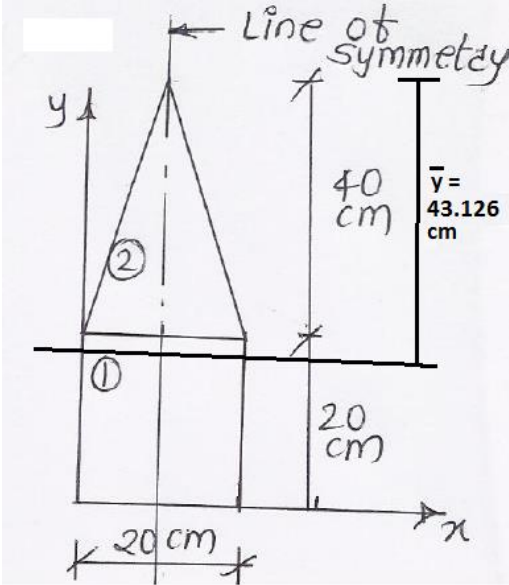
| Que. No. | Sub. Que. | Model Answers | Marks | Total Marks |
|----------|-----------|--|--------------------|-------------|
| Q.5 | b) | <p>A sphere of weight 400 N rests in a groove of smooth inclined surfaces which are making 60° & 30° inclination to the horizontal. Find the reactions at the contact surfaces.</p> <p>Ans.</p> <p>Using Lami's theorem,</p> $\frac{400}{\sin 90} = \frac{R_A}{\sin 150} = \frac{R_B}{\sin 120}$ <p>(1) (2) (3)</p> <p>Using term (1) and (2)</p> $\frac{400}{\sin 90} = \frac{R_A}{\sin 150}$ $R_A = \frac{\sin 150}{\sin 90} \times 400$ $R_A = 200N$ <p>Using term (1) and (3)</p> $\frac{400}{\sin 90} = \frac{R_B}{\sin 120}$ $R_B = \frac{\sin 120}{\sin 90} \times 400$ $R_B = 346.40N$ | 2 M each (RA & RB) | 4 |
| | c) | <p>A beam of span 4 m is simply supported at its ends. It carries concentrated load of 15 KN & 20 KN at 1m & 2m from left hand support respectively. It carries UDL of 10 KN/m from the right end. Determine reactions at the support.</p> <p>Ans.</p> | 1 | |

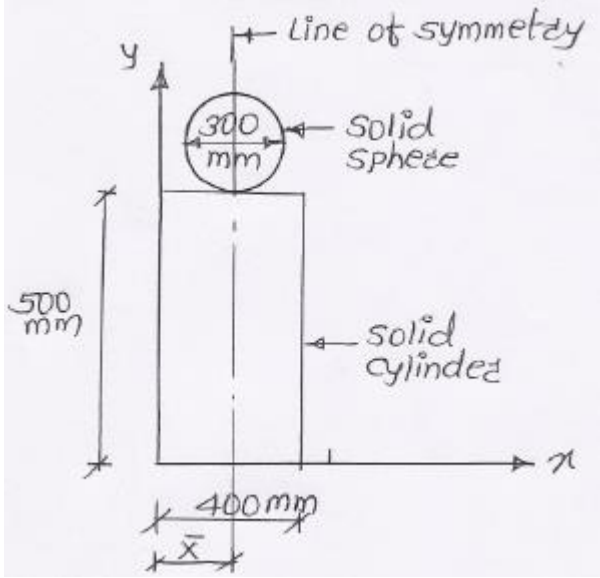
| Que. No. | Sub. Que. | Model Answers | Marks | Total Marks |
|----------|-----------|--|-------|-------------|
| Q.5 | | $\mu = \frac{52}{200}$ $\mu = 0.26$ | 2 | 4 |
| | e) | <p>Find the value of W if the body is in limiting equilibrium. See Fig. 8.</p> | | |
| | Ans. | <p>For limiting equilibrium</p> $\sum F_y = 0 \quad (\uparrow +ve, \downarrow -ve)$ $+R - W - 250 = 0$ $R = W + 250 \quad \text{----- (1)}$ $\sum F_x = 0 \quad (\rightarrow +ve, \leftarrow -ve)$ $+F - 433.012 = 0$ $F = 433.012 \text{ N}$ <p>But, $F = \mu R$</p> $433.012 = 0.25 \times R$ $R = 433.012 / 0.25$ $R = 1732.048$ <p>Putting value of R in equation (1)</p> $1732.048 = W + 250$ $W = 1482.048 \text{ N}$ | 1 | 4 |
| | f) | <p>A 200 N block is at rest on a 30° incline. The coefficient of friction between block & the incline is 0.20. Compute the value of a horizontal force P that causes motion to impend up the incline.</p> | | |
| | Ans. | <p>Consider inclined plane as x-x axis and perpendicular to it as y-y axis.</p> <p>For limiting equilibrium</p> $\sum F_y = 0$ $+R - 173.205 - (0.5) P = 0$ $R = 173.205 + (0.5) P \quad \text{----- (1)}$ | 2 | |

| Que. No. | Sub. Que. | Model Answers | Marks | Total Marks |
|----------|-----------|--|-------|-------------|
| Q.5 | | <p> $\Sigma F_x = 0$ $+ (0.866) P - F - 100 = 0$ $+ (0.866) P = (0.20 \times (173.205 + 0.5 P)) + 100$ ---Putting value of R $P = 175.77 \text{ N}$ </p> | 2 | 4 |
| Q.6 | | <p>Answer any FOUR of the following :</p> <p>a) A L section consists of two legs 100 mm X 20 mm each with 120 mm as overall depth.</p> | | |
| | Ans. | <p>1) Area calculation $A_1 = 100 \times 20 = 2000 \text{ mm}^2$ $A_2 = 100 \times 20 = 2000 \text{ mm}^2$ $A = A_1 + A_2 = 4000 \text{ mm}^2$ </p> <p>2) Position of \bar{x} $X_1 = 100 / 2 = 50 \text{ mm}$ $X_2 = 20 / 2 = 10 \text{ mm}$ </p> | 1 | 1 |

| Que. No. | Sub. Que. | Model Answers | Marks | Total Marks |
|----------|-----------|---|-------|-------------|
| Q.6 | | $\bar{x} = \frac{A_1x_1 + A_2x_2}{A}$ $\bar{x} = \frac{(2000 \times 50) + (2000 \times 10)}{4000}$ $\bar{x} = 30\text{mm}$ <p>3) Position of \bar{y}</p> $y_1 = 20 / 2 = 10 \text{ mm}$ $y_2 = 20 + (100/2) = 70 \text{ mm}$ $\bar{y} = \frac{A_1y_1 + A_2y_2}{A}$ $\bar{y} = \frac{(2000 \times 10) + (2000 \times 70)}{4000}$ $\bar{y} = 40\text{mm}$ | 1 | 4 |
| | b) | <p>Find the centroidal position of shaded area with respect to AB. See Fig. 9</p> <p>Ans.</p> <p>Consider, Fig. 1 - Rectangle (ABCD) Fig. 2 - Triangle (CDE)</p> <p>1) Area calculation $A_1 = 100 \times 500 = 50000 \text{ mm}^2$ $A_2 = \frac{1}{2} \times 20 \times 500 = 5000 \text{ mm}^2$ $A = A_1 - A_2 = 45000 \text{ mm}^2$</p> <p>2) Position of \bar{x} $X_1 = 100 / 2 = 50 \text{ mm}$ $X_2 = 80 + (2/3) \times 20 = 93.333 \text{ mm}$</p> | 1 | |

| Que. No. | Sub. Que. | Model Answers | Marks | Total Marks |
|----------|-----------|--|-------|-------------|
| Q.6 | | $\bar{x} = \frac{A_1x_1 - A_2x_2}{A}$ $\bar{x} = \frac{(50000 \times 50) - (5000 \times 93.333)}{45000}$ $\bar{x} = 45.185 \text{ mm}$ <p>Hence, Centroidal position of shaded area with respect to AB = 45.185 mm</p> <p>c) Locate centroid of shaded area. See Fig. 10</p>  | 2 | 4 |
| Ans. | | <p>1) Let, Fig. 1 – Quarter circle and Fig. 2 – Triangle Area Calculation</p> $A_1 = \frac{\pi r^2}{4} = \frac{\pi(100)^2}{4} = 7853.981 \text{ mm}^2$ $A_2 = \frac{1}{2}bh = \frac{1}{2} \times 100 \times 100 = 5000 \text{ mm}^2$ $A = A_1 - A_2 = 2853.981 \text{ mm}^2$ <p>2) \bar{x} calculation</p> $x_1 = \frac{4r}{3\pi} = \frac{4 \times 100}{3\pi} = 42.441 \text{ mm}$ $x_2 = \frac{b}{3} = \frac{100}{3} = 33.333 \text{ mm}$ $\bar{x} = \frac{A_1x_1 - A_2x_2}{A} = \frac{(7853.981 \times 42.441) - (5000 \times 33.333)}{2853.981}$ $\bar{x} = 58.397 \text{ mm}$ | 1 | 1½ |

| Que. No. | Sub. Que. | Model Answers | Marks | Total Marks |
|----------|-----------|---|-------|-------------|
| Q.6 | | <p>3) \bar{y} calculation</p> $y_1 = \frac{4r}{3\pi} = \frac{4 \times 100}{3\pi} = 42.441 \text{ mm}$ $y_2 = \frac{b}{3} = \frac{100}{3} = 33.333 \text{ mm}$ $\bar{y} = \frac{A_1 y_1 - A_2 y_2}{A} = \frac{(7853.981 \times 42.441) - (5000 \times 33.333)}{2853.981}$ $\bar{y} = 58.397 \text{ mm}$ <p>Hence, centroid (G) for given section lies at $G(\bar{x}, \bar{y})$ = (58.397 mm from y axis & 58.397 mm from x axis)</p> <p>d) A solid cone of height 40 cm is placed on a cube of side 20 cm as shown in Fig. 11. Locate the position of CG with respect to tip of the cone.</p> <p>Ans.</p>  <p>1) Volume Calculation</p> $V_1 = 20 \times 20 \times 20 = 8000 \text{ cm}^3$ $V_2 = (1/3)\pi r^2 h = (1/3)\pi (10)^2 \times 40 = 4188.79 \text{ cm}^3$ $V = V_1 + V_2 = 12188.79 \text{ cm}^3$ <p>3) \bar{y} calculation</p> $y_1 = 40 + \frac{20}{2} = 50 \text{ cm}$ $y_2 = h_2 - \frac{h_2}{4} = 40 - \frac{40}{4} = 30 \text{ cm}$ | 1½ | 4 |
| | | | 1 | 1 |

| Que. No. | Sub. Que. | Model Answers | Marks | Total Marks |
|----------|-----------|---|-------|-------------|
| Q.6 | | $\bar{y} = \frac{V_1 y_1 + V_2 y_2}{V}$ $\bar{y} = 43.126 \text{ cm}$ | 2 | 4 |
| | e) | <p>Find the centre of gravity of composite solid w.r.t. x & y axis. See Fig. 12.</p> | | |
| | Ans. |  <p>1) Figure is symmetric @ y-y axis and hence, $\bar{x} = \text{Maximum horizontal dimension} / 2$ $= 400 / 2$ $= 200 \text{ mm}$</p> <p>2) Volume Calculation</p> $V_1 = \pi r_1^2 h_1 = \pi (200)^2 \times 500 = 62831853 \text{ mm}^3$ $V_2 = (4/3)\pi r_2^3 = (4/3)\pi (150)^3 = 14137167 \text{ mm}^3$ $V = V_1 + V_2 = 76.96902 \times 10^6 \text{ mm}^3$ <p>3) \bar{y} calculation</p> $y_1 = \frac{500}{2} = 250 \text{ mm}$ $y_2 = 500 + 150 = 650 \text{ mm}$ $\bar{y} = \frac{V_1 y_1 + V_2 y_2}{V}$ $\bar{y} = 323.47 \text{ mm}$ | 1 | 1 |
| | | | 1 | 4 |



| Que. No. | Sub. Que. | Model Answers | Marks | Total Marks |
|----------|-----------|---|-------------------|-------------|
| Q.6 | | <p>2) Volume Calculation</p> $V_1 = (1/3)\pi r_1^2 h = (1/3)\pi(30)^2 \times 100 = 30000\pi \text{ cm}^3$ $V_2 = (1/3)\pi r_2^2 h_2 = (1/3)\pi(15)^2 \times 50 = 3750\pi \text{ cm}^3$ $V = V_1 - V_2 = 26250\pi \text{ cm}^3$ <p>3) \bar{y} calculation</p> $y_1 = \frac{h}{4} = \frac{100}{4} = 25 \text{ cm}$ $y_2 = h_1 + \frac{h_2}{4} = 50 + \left(\frac{50}{4}\right) = 62.5 \text{ cm}$ $\bar{y} = \frac{V_1 y_1 - V_2 y_2}{V}$ $\bar{y} = 19.64 \text{ cm}$ | <p>1</p> <p>1</p> | <p>4</p> |